



Oxford Cambridge and RSA

Monday 15 November 2021 – Afternoon

GCSE (9–1) Computer Science

J276/01 Computer systems

Time allowed: 1 hour 30 minutes



Do not use:

- a calculator



Please write clearly in black ink. **Do not write in the barcodes.**

Centre number

--	--	--	--	--

Candidate number

--	--	--	--

First name(s)

Last name

INSTRUCTIONS

- Use black ink.
- Write your answer to each question in the space provided. If you need extra space use the lined pages at the end of this booklet. The question numbers must be clearly shown.
- Answer **all** the questions.

INFORMATION

- The total mark for this paper is **80**.
- The marks for each question are shown in brackets [].
- Quality of written communication will be assessed in questions marked with an asterisk (*).
- This document has **12** pages.

ADVICE

- Read each question carefully before you start your answer.

2

1 A computer system has a 2.5 GHz processor and 5 GB of RAM.

(a) Complete the paragraph about memory by writing the missing terms in the spaces, using the words provided.

- | | | | | | |
|------------|--------------|------------|--------------|-----------|----------|
| cache | data | hard drive | instructions | changed | closing |
| operator | primary | random | read | secondary | start-up |
| translator | memory stick | virtual | write | | |

ROM stands for only memory. This stores the instructions for a computer and cannot be

RAM stands for access memory. This stores the instructions and that are currently being used. If the computer does not have enough RAM to run a process it can make use of memory.

RAM and ROM are both examples of memory. Memory located close to the processor that allows faster access than from RAM is called memory. [8]

(b) (i) State the purpose of a CPU.

.....
 [1]

(ii) State what is meant by a single core 2.5 GHz processor.

.....

 [2]

(c) Von Neumann architecture includes registers.

Identify **two** registers used in Von Neumann architecture.

1
 2
[2]

3

2 Layla uses her computer to create educational games.

Layla makes use of system software.

(a) One type of system software is the operating system.

Identify and describe **two** functions of an operating system.

Function 1

Description

.....

.....

.....

Function 2

Description

.....

.....

.....

[6]

(b) Layla also uses utility system software.

(i) State the purpose of utility system software.

.....

..... [1]

(ii) Layla uses a backup utility. She performs both full and incremental backups.

Explain the reasons why Layla performs both full and incremental backups.

.....

.....

.....

.....

.....

..... [3]

4

(c) When Layla has finished her educational game, she is going to release it as open source.

Give **one** benefit and **one** drawback of Layla releasing her game as open source.

Benefit

.....

Drawback

.....

[2]

3 A technology company brings out new, updated devices twice a year.

(a) Describe the environmental impacts of the company bringing out new devices twice a year.

.....

.....

.....

..... [2]

(b) Describe the cultural impacts of the company bringing out new devices twice a year.

.....

.....

.....

..... [2]

6

- 5 A program is being created to convert the data capacity of a storage device into a different measure.

The function, `calculate()`, takes the measurement (e.g. gigabytes) and the number (e.g. 2) as two parameters. It then returns the value in bits. The function returns `-1` if an invalid measurement was entered.

Complete the function `calculate`

```
function calculate(....., number)

    if measurement == "gigabytes" then
        value = number * 1024 * 1024 * 1024 * 8
    elseif measurement == "....." then
        value = number * 1024 * 1024 * 8
    elseif measurement == "....." then
        value = number * 1024 * 8
    elseif measure == "bytes" then
        value = number * .....
    else
        .....
    endif

    return .....

endfunction
```

[6]

6 Charlie has purchased a new tablet computer. The tablet has an internal secondary storage device.

(a) Describe what the internal secondary storage device will store.

.....
.....
.....
..... [2]

(b) The storage device is a solid state device.

(i) Give **three** benefits of the tablet having a solid state device instead of a magnetic device.

1
.....
2
.....
3
..... [3]

(ii) Give **two** drawbacks of the tablet having a solid state device instead of a magnetic device.

1
.....
2
..... [2]

8

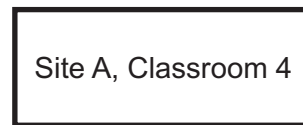
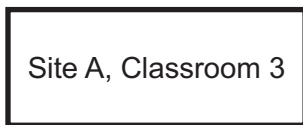
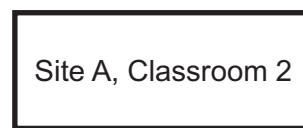
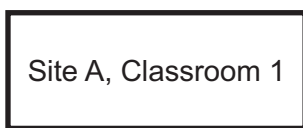
7 A university has buildings in two sites that are 5 miles apart.

(a) Describe the difference between a LAN and a WAN.

.....
.....
.....
..... [2]

(b) Site A has 4 classrooms. Site B has 2 classrooms. The network on each site between the classrooms is a star topology using a switch. The two sites are connected over the Internet.

Complete the network diagram for **site A** of the University.



[2]

(c) Site B has a higher network performance than site A.

(i) Explain how each of the following can contribute to the performance of a network.

Wifi frequency

.....

Interference

.....

Number of concurrent users

.....

Type of network traffic

.....

[4]

(ii) Identify **one** other factor that can contribute to the performance of a network.

.....

..... [1]

(iii) The data transmitted between the two sites uses packet switching. Data is transmitted from a computer in site A to a computer in site B.

Describe how packet switching can be used when sending data from one site to the other.

.....

.....

.....

.....

.....

.....

.....

.....

.....

.....

..... [4]

(d) The university want to protect their data against threats when connected to the Internet.

(i) Describe the threat malware can pose to the university’s network and give a prevention method that the university can use.

Description

.....

.....

.....

Prevention

.....

[3]

(ii) Describe the threat a brute force attack can pose to the university’s network and give a prevention method that the university can use.

Description

.....

.....

.....

Prevention

.....

[3]

(e) Data transmitted over the network uses different protocols.

Tick **one** box in each row to identify whether the protocol is related to email, transferring files or accessing websites.

Protocol	Email	Transferring files	Accessing websites
POP			
FTP			
SMTP			
HTTPS			

[4]

(f) The building is considering the implementation of a virtual network.

Describe what is meant by a virtual network.

.....
.....
.....
..... [2]

8 Identify the legislation that relates to the following scenarios:

A programmer wants to protect their work from being copied or distributed.

.....

A person logs into a computer without permission by guessing the password.

.....

A person makes a request to view financial information held by a public authority.

.....

A hacker gains access to a company's files over a network without permission.

.....

A company collects data that it does not need about its customers.

.....

[5]

END OF QUESTION PAPER

ADDITIONAL ANSWER SPACE

If additional space is required, you should use the following lined page(s). The question number(s) must be clearly shown in the margin(s).

Lined area for providing answers, consisting of multiple horizontal dotted lines and a solid vertical margin line on the left.



Copyright Information

OCR is committed to seeking permission to reproduce all third-party content that it uses in its assessment materials. OCR has attempted to identify and contact all copyright holders whose work is used in this paper. To avoid the issue of disclosure of answer-related information to candidates, all copyright acknowledgements are reproduced in the OCR Copyright Acknowledgements Booklet. This is produced for each series of examinations and is freely available to download from our public website (www.ocr.org.uk) after the live examination series. If OCR has unwittingly failed to correctly acknowledge or clear any third-party content in this assessment material, OCR will be happy to correct its mistake at the earliest possible opportunity. For queries or further information please contact The OCR Copyright Team, The Triangle Building, Shaftesbury Road, Cambridge CB2 8EA. OCR is part of the Cambridge Assessment Group; Cambridge Assessment is the brand name of University of Cambridge Local Examinations Syndicate (UCLES), which is itself a department of the University of Cambridge.